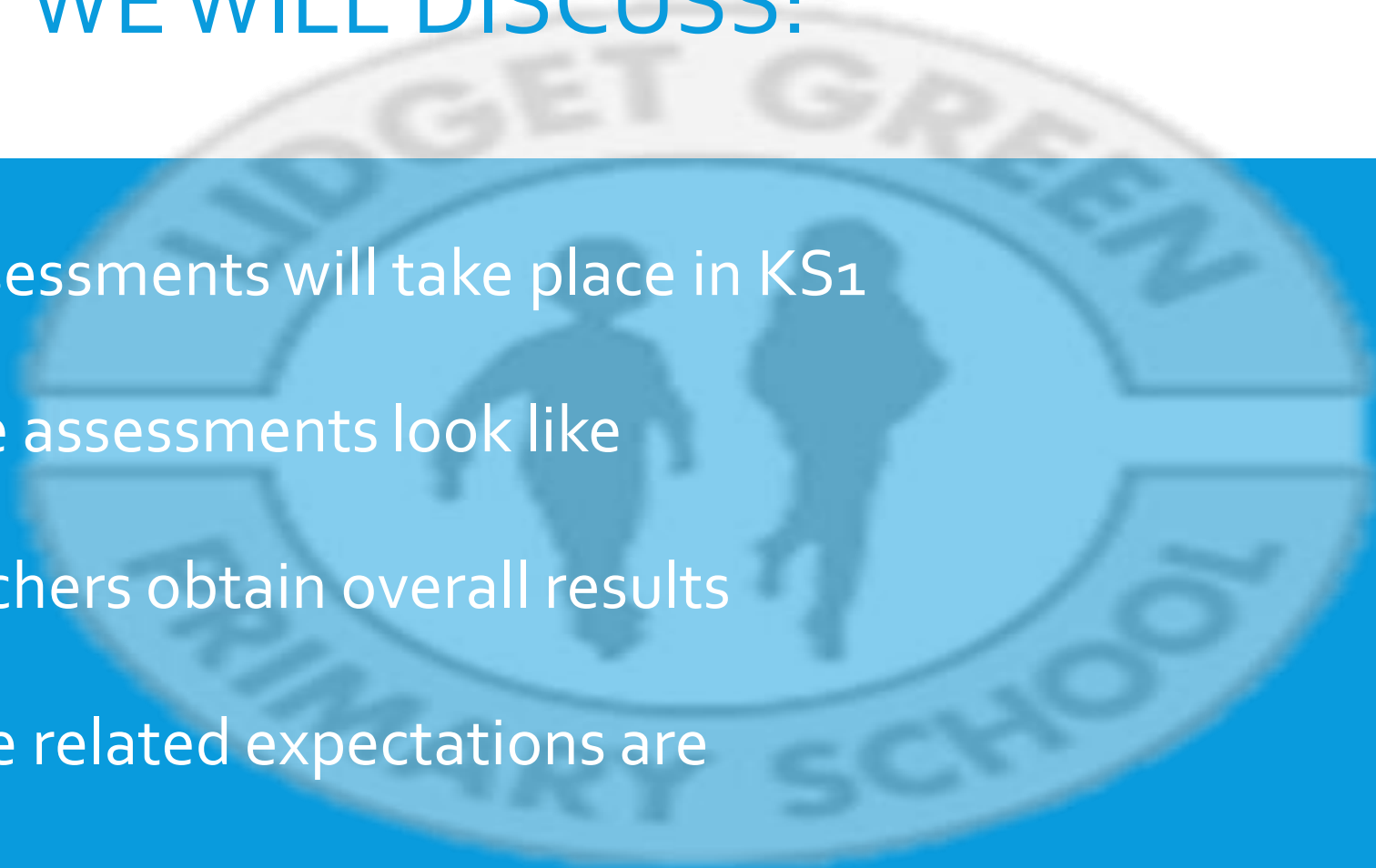




KS₁ ASSESSMENTS 2023

TODAY WE WILL DISCUSS:

- What assessments will take place in KS1
- What the assessments look like
- How teachers obtain overall results
- What age related expectations are
- How you can help your child



WHAT ASSESSMENTS WILL TAKE PLACE?

At the end of Year 2, children in England sit national tests in the following subjects:

- *English – Reading (2 papers)
- *Maths – Arithmetic
- *Maths- Reasoning

These tests reflect the updated National Curriculum.

WHAT DO THE ASSESSMENTS LOOK LIKE?

English Reading

Paper 1

Reading booklet with questions and answer spaces combined.

(Texts totalling 400 – 700 words)

Paper 2

Reading booklet with a separate booklet which has the questions and answer spaces.

(Texts totalling 800-1100 words)

How the hedgehog got its name

Hedgehogs were not always called hedgehogs. Hundreds of years ago, the name of a hedgehog was an **urchin**. It was given a new name because of two things:



1. It likes to live under leaves in bushes and hedges.
2. It makes funny grunts and snuffle sounds, just like a pig or hog.

1 What did people call hedgehogs a long time ago?



1 mark

2 What sort of places does a hedgehog live in?

Tick (✓) **one**.

in ponds and rivers

in hidden places

in open spaces

high up in trees



1 mark

3 Grunts and snuffles are...

Tick (✓) **one**.

animal food.

types of plants.

animal noises.

types of animals.



1 mark

English - Reading Paper 1 Example Page



English - Reading Paper 2 Example Pages

This is an old Native American story about a man called Heron Feather and the time he met a fox.

Heron Feather is a Native American warrior. Warriors were sometimes known as 'braves'.

The Fox and the Boastful Brave

One fine day, a hungry fox was walking down the road. His tummy was rumbling so loudly that he almost didn't hear the sound of someone coming. Just in time, he heard someone singing. Fox dashed off the path and hid behind a bush.

Over the top of the hill, he saw a tall feather. Fox crouched down and prepared to pounce on the bird.

Imagine his surprise when he saw that the 'bird' was riding a horse! The feather was stuck in the headdress of a handsome young man who was riding along the path, singing as he went. "No one is handsomer than Heron Feather. No one is a better fisherman than Heron Feather. And I should know, for I am he."



Fox didn't care if the man was handsome, but he pricked up his ears at the word 'fisherman', for where there are fishermen, there are fish. And a tasty fish would just suit Fox. His nose twitched. A delightful fishy smell was coming out of the man's leather bag.

Heron Feather continued his boastful song. He was on his way to ask a young woman called Swaying Reed to marry him, and he was making himself feel braver by singing his own praises.

Fox bounded ahead of the horse and lay down on the path.

"No one is stronger than... what's this? A fox? When Swaying Reed's mother sees this, she will know what a great hunter I am."

And he picked Fox up, flung him into his bag of fish and laced it shut again. Heron Feather remounted and began a new song.

"No one is a greater hunter than Heron Feather..."

Inside the bag, surrounded by the stinky smelly fish, Fox's mouth was watering. He waited a few minutes, then bit a big hole in the side of the bag. One by one, the fish fell out, followed last of all by Fox. Heron Feather was singing so loudly to notice.



Questions 7–15 are about *The Fox and the Boastful Brave* (pages 6–8)

(page 6)

7

Just in time, he heard someone singing. Fox dashed off the path and hid behind a bush.

Find and copy one word that shows that Fox moved quickly.



1 mark

(page 6)

8

What did Fox think was coming over the hill?

Tick **one**.

a horse

a man

a bird

a fish



1 mark

Maths

Paper 1

Arithmetic

(25 marks
available)

Paper 2

Reasoning,
problem solving
and mathematical
fluency

(35 marks
available)

Maths Paper 1 Example Pages (Arithmetic)

9

$6 \times 10 = \boxed{}$



1 mark

10

$100 - 10 = \boxed{}$

19

$67 + 33 = \boxed{}$



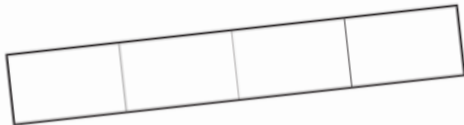
1 mark

20

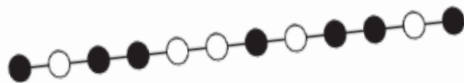
$59 - 15 = \boxed{}$

Maths Paper 2 Example Pages (Reasoning)

- 8 Shade $\frac{3}{4}$ of this shape.



- 9 Put a tick below the **fourth black bead**.



15



A classroom has **6** tables.

Each table has **5** children sitting at it.

Complete the number sentence to show how many children there are **altogether**.

$$\square \times \square = \square \text{ children}$$



HOW DO TEACHERS OBTAIN RESULTS?

KS1 SATs tests are one part of evidence towards the whole teacher assessment.

They are marked in school, and an overall grading based on the whole year's work will be made.

Teacher assessment is reported to the Local Authority as part of the statutory assessment process.

Moderation often takes place to ensure consistency across schools.

WHAT ARE AGE RELATED EXPECTATIONS?

Working below the expected standard (Not working within the Year 2 Curriculum).

Working towards the expected standard (Some of the learning is within the Year 2 Curriculum).

Working at the expected standard (All learning is within the Year 2 Curriculum).

Working at greater depth (Very secure in Year 2 Curriculum).

HOW CAN YOU HELP YOUR CHILD?

- Support and reassure your child that there is nothing to worry about and they should always just try their best. Praise and encourage!
- Ensure your child has the best possible attendance at school.
- Support your child with any homework tasks.
- Reading, spelling and arithmetic (e.g. times tables) are always good to practise.
- Talk to your child about what they have learnt at school and what book(s) they are reading (the character, the plot, their opinion).
- Make sure your child has a good sleep and healthy breakfast every morning!

LEARNING CAN HAPPEN ANYWHERE- THEY DON'T NEED TO SIT AT A DESK AT HOME!

SILSDEN
FUN FAIR MEGA VALUE
RIVERSIDE FIELD • KEIGHLEY RD • BD20 0EH

ENTRY JUST **£10** PER SESSION... DAILY

UNLIMITED FREE RIDES

JUBILEE ENTERTAINMENT
THURSDAY 2ND
TRANSFORMERS
FRIDAY 3RD
GIANT DINOSAURS
SATURDAY 4TH
FACE PAINTING &
FREE BALLOON MODELLING

£2 FOR NON RIDERS
FREE CAR PARK
A FUN DAY OUT FOR ALL THE FAMILY!
OPEN EVERY DAY

3 DAILY SESSIONS
12PM - 2:30PM
3PM - 5:30PM + 5PM - 8:30PM
SUNDAY 5TH 12PM - 2:30PM & 3PM - 5:30PM

**THURS - 26TH MAY
- SUN 5TH JUNE**

GAMES & STALLS | FOOD & FUN | ALCOHOL FREE SITE

Encourage reading on the go!

You can ask your child to read from posters and then ask them questions to practise comprehension skills.

Example questions:

How much will they charge 2 people if they don't want to go on any rides?

Can we stay from morning until evening?

What can non-riders do there?

CHALLENGE YOUR CHILD WITH MATHEMATICAL PROBLEMS WITH A PURPOSE.

Aldi fruit and veg.
100% Fresh. Guaranteed.

AVAILABLE FROM **THUR 23 MAR**

100% HAPPY FRESH GUARANTEE ON YOUR MONEY BACK

 <p>Pineapple ONLY 79p each</p>	 <p>2 Pack Romaine Lettuce Hearts ONLY 79p 2 pack</p>
 <p>6 Pack Royal Gala Apples ONLY 99p 6 pack</p>	 <p>White Mushrooms ONLY 99p 400g</p>
 <p>Tenderstem[®] Broccoli ONLY £1.19 300g</p>	 <p>Red Grapes ONLY £1.19 500g</p>

SUPER 6

FPC FRESH AWARDS 2023

Aldi. Fresh Fruit and Veg Retailer of the Year.

Example questions:

What coins do I need to make exactly 99p?

What is the total I would have to pay if I bought some grapes and a pineapple?

What is the difference between the price of grapes and mushrooms?

How much change would I get from £2 if I bought lettuce?

If a single apple costs 5p, how much would 7 apples cost?

If I paid £1 for 4 mushrooms, how much did each mushroom cost individually?

ENCOURAGE WRITING FOR DIFFERENT PURPOSES

- Diary to express their feelings in private
- Shopping lists
- Letter to a friend or family member
- Notes to remind themselves of their daily tasks
- Create recipe pages after baking things together
- Use art tools to learn spellings- painting each letter a different colour or using chalk on the ground outdoors
- Play games:
 - spell a four lettered word that starts with 's' and ends with 'd'
 - give me two words that mean the same as big
 - Say a sentence- Can they tell you what punctuation would go at the end? Can they identify the verb or adjective in the sentence? Can they say the sentence in the past tense?

THANK YOU FOR YOUR TIME

Any questions?

